

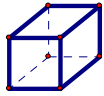
拔「數」尋根數學競賽試題卷 970509~970516

年 班 號 姓名：

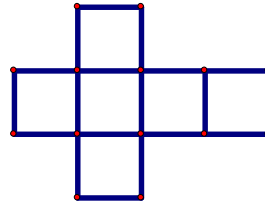
正立方體的展開圖

* 請用直尺畫出邊長為 1 公分的正立方體展開圖。

(正立方體的展開圖有許多種，請把所有的展開圖畫出來)



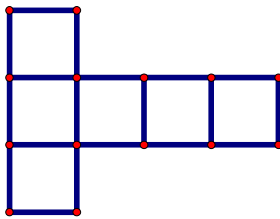
正立方體



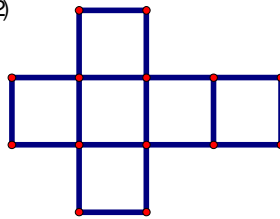
展開圖

【解】：

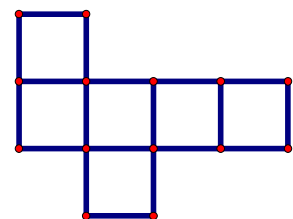
(1)



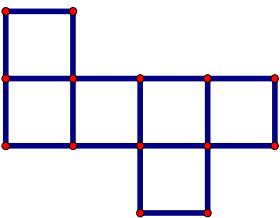
(2)



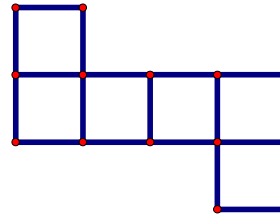
(3)



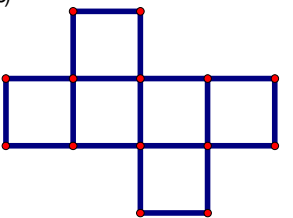
(4)



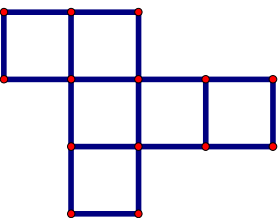
(5)



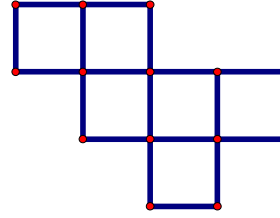
(6)



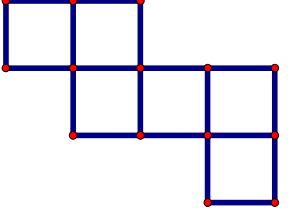
(7)



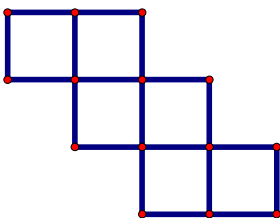
(8)



(9)



(10)



(11)

